



What to do


You're looking for a birthday present for your friend at the shop. You've found four items to choose from but you only have \$5 to spend. Which item can you afford? Use the coins to add up the value of each item.



Total \$



Total \$



Total \$



Total \$

Which item can you afford?



.....

.....

.....

